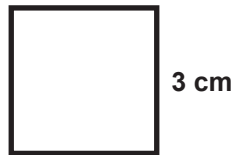
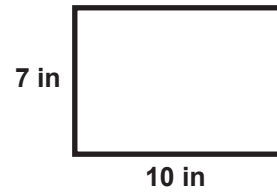


Area

1 Find the area of this square.



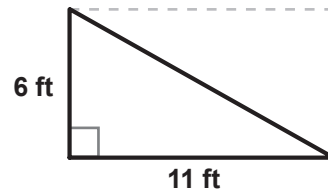
2 Find the area of this rectangle.



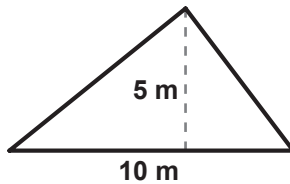
3 Find the area of this rectangle.



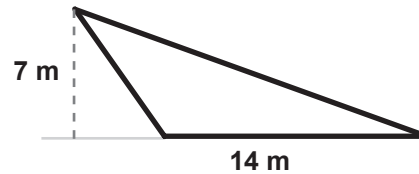
4 Find the area of this right triangle.



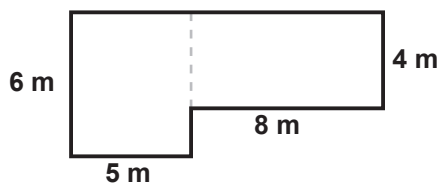
5 Find the area of this acute triangle.



6 Find the area of this obtuse triangle.



7 This shape is a combination of two rectangles. What is its area?



8 This shape is a combination of a triangle and a rectangle. What is its area?

